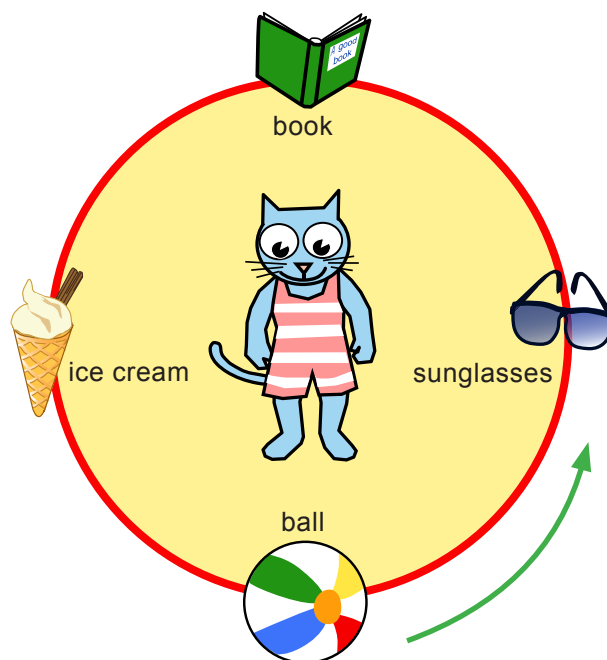
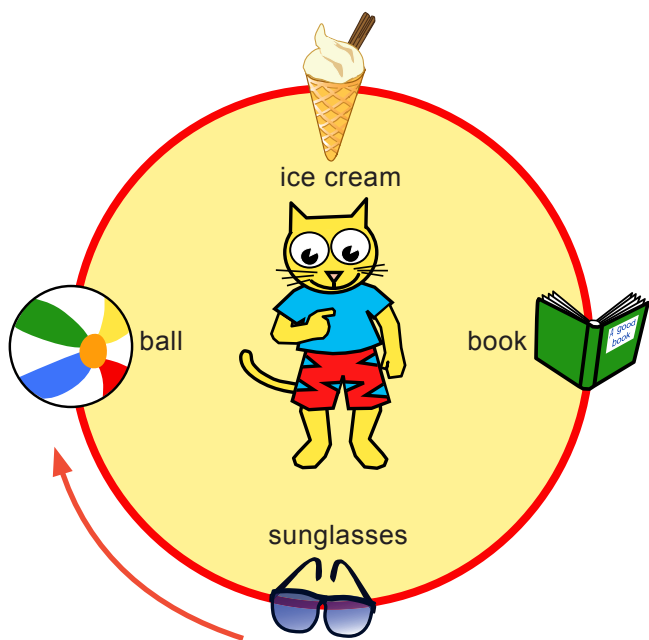


Buzz or Fizz?













Buzz can only turn **clockwise**.

Fizz can only turn **anticlockwise**.

Fill in the boxes to complete the sentences.
Buzz and Fizz return to their start place each time.

- needs to make a quarter turn to face the sunglasses.
- needs to make a three quarter turn to face the book.
- If Fizz makes a three quarter turn she will face the
- needs to make a full turn to face the sunglasses.
- If Buzz makes a quarter turn he will face the
- needs to make a half turn to face the book.

Use Worksheet 3a, 'Buzz takes turns', to make up a quiz of your own.

<p>Clockwise is the direction hands move on a clock.</p> 				
	quarter turn clockwise	half turn clockwise	three quarter turn clockwise	full turn clockwise
<p>Anticlockwise is the opposite direction.</p> 				
	quarter turn anticlockwise	half turn anticlockwise	three quarter turn anticlockwise	full turn anticlockwise

BUZZ

A magazine for young mathematicians